

Nombre: .....

Curso 2º: ..... Fecha: / /


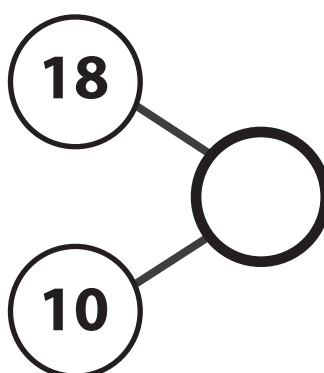
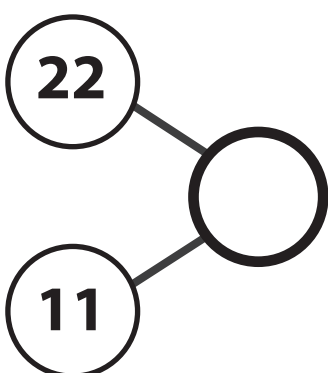
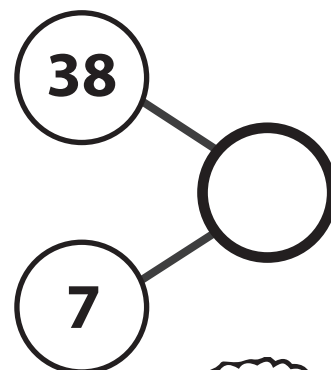
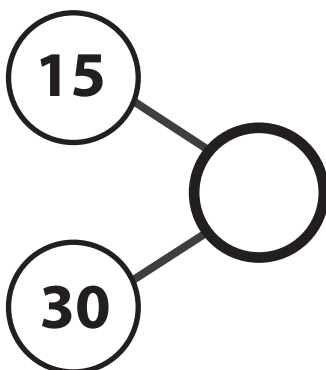
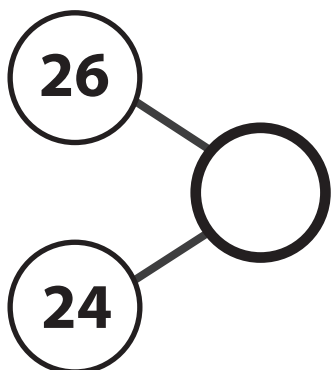
CLASE N° 1



2º Básico

Gonzalo Romero Parra  
Encargado de Matemática SEP

Completa las siguientes composiciones.



Nombre: .....

Curso 2º: ..... Fecha: / /

CLASE N° 2



2º Básico

Gonzalo Romero Parra  
Encargado de Matemática SEP

Completa las siguiente adiciones.

	D	U
	3	3
+	1	3


	D	U
	2	1
+	1	2

	D	U
	1	8
+	1	1

	D	U
	3	0
+	2	1

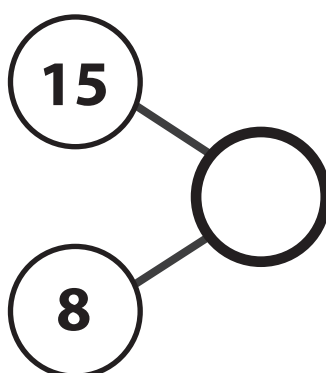
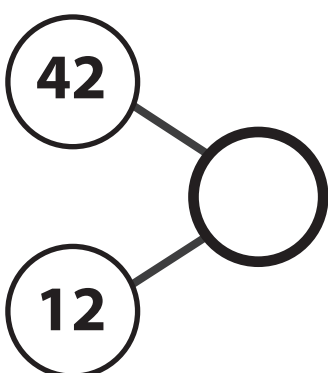
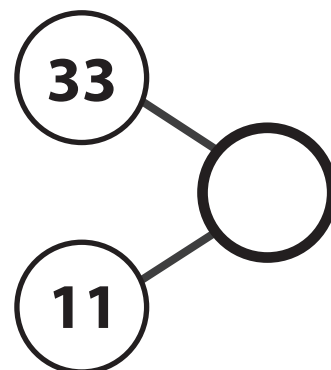
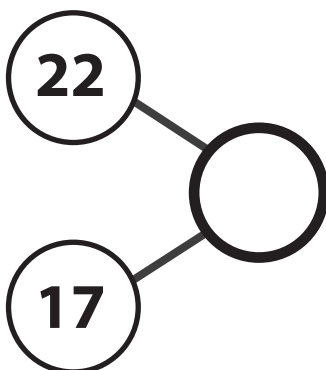
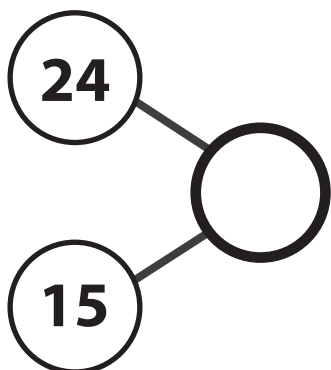
	D	U
	4	1
+	1	8

	D	U
	2	5
+	1	4





Completa las siguientes composiciones.



Completa las siguiente adiciones.

	<b>D</b>	<b>U</b>
	5	8
+	3	0
	_____	

	<b>D</b>	<b>U</b>
	3	0
+	1	2
	_____	

	<b>D</b>	<b>U</b>
	4	0
+	1	0
	_____	

	<b>D</b>	<b>U</b>
	6	7
+	2	2
	_____	



	<b>D</b>	<b>U</b>
	3	4
+	2	5
	_____	

	<b>D</b>	<b>U</b>
	2	4
+	1	3
	_____	